


Scholar: Phuong

Date: \_\_\_\_\_

## Problem Solving Task

How many centimeters long is the fish?



5 cm

Explain how you figured it out.

First I counted how many centimeters and I started at 0 because the fish is in a different place. It's starting at 5!

What could have been done to make measuring the fish easier?


I would move the fish to 0 cm then measure until the end.

Scholar: Ayden

Date: \_\_\_\_\_

## Problem Solving Task

How many centimeters long is the fish?



5 centimeter

Explain how you figured it out.

I figured it out by using my hands to see how long it is and then I put it on the ruler and it said it was 5 centimeter long.

What could have been done to make measuring the fish easier?


What could have been easier to make measuring the fish easier was if I had millimeter ruler.

Scholar: Isabella

Date: \_\_\_\_\_

## Problem Solving Task

How many centimeters long is the fish?



Explain how you figured it out.

I got 5 cm because I first took my fingers and measured it then I moved it to 1 cm and I got 5 cm for my answer.

What could have been done to make measuring the fish easier?

It would of been easier if the fish started at 1 cm so we can measure it easier.


Scholar: Elias

Date: \_\_\_\_\_

## Problem Solving Task

How many centimeters long is the fish?

8 cm



6 cm      6 cm

Explain how you figured it out.

I figured it out because I thought  
it was at 1 and I thought it  
was at 6 cm.

What could have been done to make measuring the fish easier?


I think you should think that  
fish is at zero and I got 6 cm.

Scholar: AJ

Date: \_\_\_\_\_

## Problem Solving Task

How many centimeters long is the fish?



5 cm

Explain how you figured it out.

I got 5 cm because I measured with  
2 fingers and put it at 1 cm and  
it reached to 5 cm


What could have been done to make measuring the fish easier?

Scholar: Zaria

Date: 4/7/19

## Problem Solving Task

How many centimeters long is the fish?



5 cm

Explain how you figured it out.

I figured this out because  
since the fish started at the  
five it would still be five  
cm long because it would  
end at the ten because we skipped

What could have been done to make measuring the fish easier? some numbers


What could have made this  
easier is making the fish  
start at the zero.

Scholar: Salome O

Date: \_\_\_\_\_

## Problem Solving Task

How many centimeters long is the fish?



Explain how you figured it out.

I figured it out by where the end of the fishes tail and I got 10 cm.

What could have been done to make measuring the fish easier?

Something that could make the fish easier to measure would be if the fish started at 0 it would be easier.


Scholar: Nyatic

Date: \_\_\_\_\_

## Problem Solving Task

How many centimeters long is the fish?

5 centimeters long



Explain how you figured it out.

---

---

---

---

What could have been done to make measuring the fish easier?

---

---

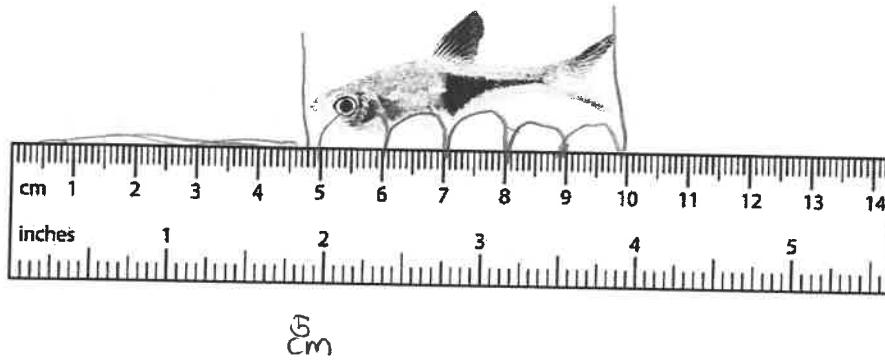


Scholar : Roman

Date: \_\_\_\_\_

## Problem Solving Task

How many centimeters long is the fish?



Explain how you figured it out.

I put my pinky to the fish then when I put my pinky the start of cm and


What could have been done to make measuring the fish easier?

Scholar: Faith

Date: \_\_\_\_\_

### Problem Solving Task

How many centimeters long is the fish?



Explain how you figured it out.

I put my fingers in between the fish and counted how many lines are

What could have been done to make measuring the fish easier?


\_\_\_\_\_  
\_\_\_\_\_

Scholar: Camila

Date: April 1<sup>st</sup> 2019

## Problem Solving Task

How many centimeters long is the fish?



Explain how you figured it out.

how I figured it out was by measuring to the nearest number & I got 5 even though that probably wasn't the correct answer because I estimated.

What could have been done to make measuring the fish easier?

What could have been done to measure the fish easier  
as to


Scholar: Anthony

Date: April 1st 2016

## Problem Solving Task

How many centimeters long is the fish?

5 cm



Explain how you figured it out.

I used the ruler but counted wrong because it's not on the zero

What could have been done to make measuring the fish easier?


You could move it to the 0 on the centimeter side

Scholar: Amayan

Date: \_\_\_\_\_

## Problem Solving Task

How many centimeters long is the fish?



the end fish is 3,  
5 cm

Explain how you figured it out.

I got my answer by looking at the  
ruler and seeing that the fish is 3  
centimeters long.

What could have been done to make measuring the fish easier?

\_\_\_\_\_

\_\_\_\_\_


Scholar:

Marbins

Date:

## Problem Solving Task

How many centimeters long is the fish?



5 cm

Explain how you figured it out.

I counted at the beginning  
then counted to the end.


What could have been done to make measuring the fish easier?

Scholar: Renejah

Date: \_\_\_\_\_

## Problem Solving Task

How many centimeters long is the fish?



10 cm

Explain how you figured it out.

I figured it out because  $5 + 5 = 10$

and it starts at 5 and then

6 7 8 9 10 and it stops at 10

so 10 is 5

What could have been done to make measuring the fish easier?

to start at the inches and


then cm.

Scholar: LaSean

Date: \_\_\_\_\_

## Problem Solving Task

How many centimeters long is the fish?



5 centimeters

Explain how you figured it out.

I figured it out because I noticed that the size of the fish is

What could have been done to make measuring the fish easier?




Scholar: Eli M.

Date: \_\_\_\_\_

## Problem Solving Task

How many centimeters long is the fish?



Explain how you figured it out.

I started at 5 cm & ended at  
9 & got 4 by 5

What could have been done to make measuring the fish easier?