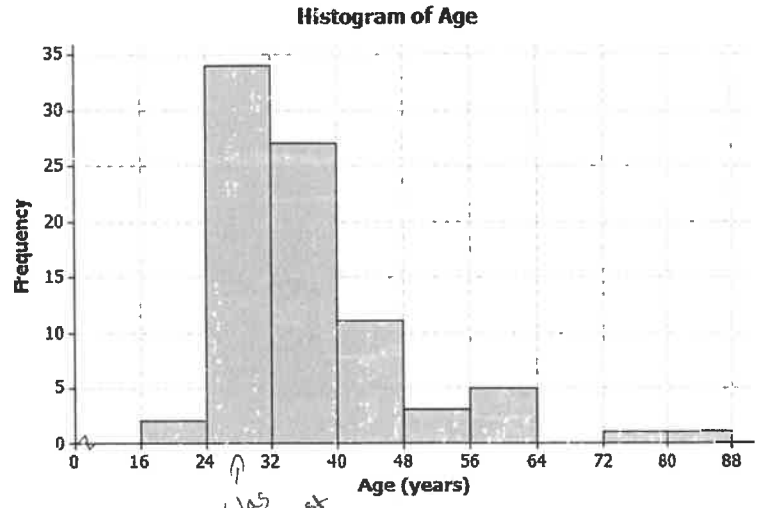


Name: TS

Number: \_\_\_\_\_

### Lesson 6.4 - Exit Ticket

1) The following histogram shows ages of the actresses whose performances have won in the Best Leading Actress category at the annual Academy Awards (Oscars).



a. Which age interval contains the most actresses? How many actresses are represented in that interval?

ages 24-32 <sup>contain</sup> the most actresses, and around 35 actresses are represented.

Has the most actresses

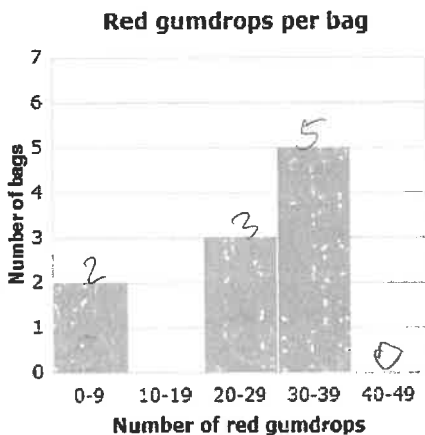
b. How would you describe a typical age of an actress who won the award?

I would describe the <sup>typical</sup> age to be 24-32 years

c. An age of 72 would be included in which interval?

The age of 72 would be included in the interval 72-80 <sup>old.</sup>

2) A machine dispensed red gumdrops into bags of various sizes.



Are there fewer bags that had 0-9 red gumdrops or bags that had 40-49 red gumdrops?

No, there are 2 more bags that had 0-9 red gumdrops than 40-49 gumdrops

Name: Boyer

Number: \_\_\_\_\_

### Lesson 6.4 - Exit Ticket

1) The following histogram shows ages of the actresses whose performances have won in the Best Leading Actress category at the annual Academy Awards (Oscars).



a. Which age interval contains the most actresses? How many actresses are represented in that interval?

~~35 years old~~

24-32 actresses

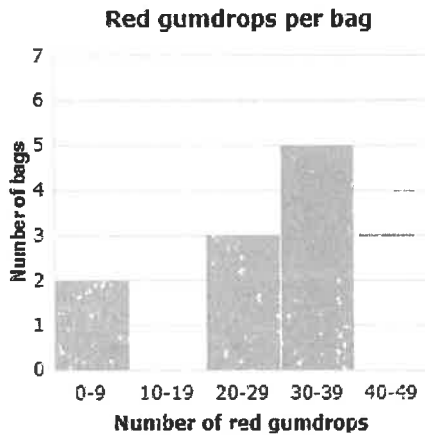
b. How would you describe a typical age of an actress who won the award?

I would describe the age with 24-32 years of age that won the most

c. An age of 72 would be included in which interval?

the interval is 72-80 will

2) A machine dispensed red gumdrops into bags of various sizes.



Are there fewer bags that had 0-9 red gumdrops or bags that had 40-49 red gumdrops?

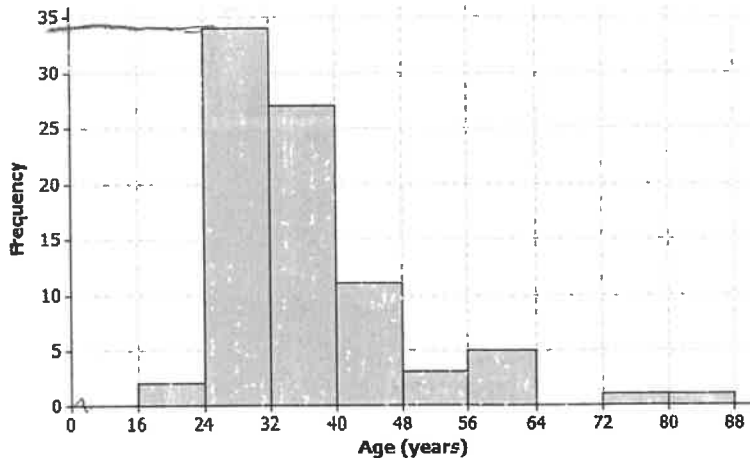
No there were more bags that had 0-9 red gumdrops than 40-49 red gumdrops.

Name: Amelia

Lesson 6.4 - Exit Ticket

1) The following histogram shows ages of the actresses whose performances have won in the Best Leading Actress category at the annual Academy Awards (Oscars).

Histogram of Age



a. Which age interval contains the most actresses? How many actresses are represented in that interval?

The interval that contains the most actresses is 24-32  
About 34 actresses

b. How would you describe a typical age of an actress who won the award?

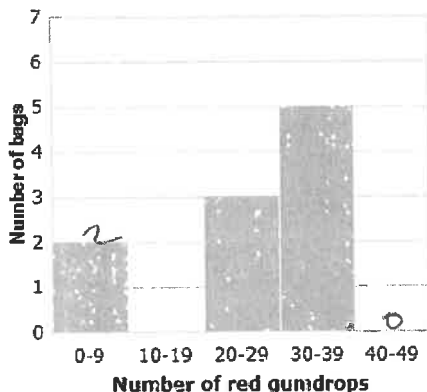
The typical age would be about 28 years old.

c. An age of 72 would be included in which interval?

The age 72 would be included in the interval 72-80

2) A machine dispensed red gumdrops into bags of various sizes.

Red gumdrops per bag



Are there fewer bags that had 0-9 red gumdrops or bags that had 40-49 red gumdrops?

The are fewer bag tha had 40-49 red gumdrops because for 0-9 there are 2 bags for 40-49 there are 0 bags.

Name: Adriana

Number: \_\_\_\_\_

### Lesson 6.4 - Exit Ticket

1) The following histogram shows ages of the actresses whose performances have won in the Best Leading Actress category at the annual Academy Awards (Oscars).



a. Which age interval contains the most actresses? How many actresses are represented in that interval?

The interval is 24-32 because it contains the most actresses which is 34.

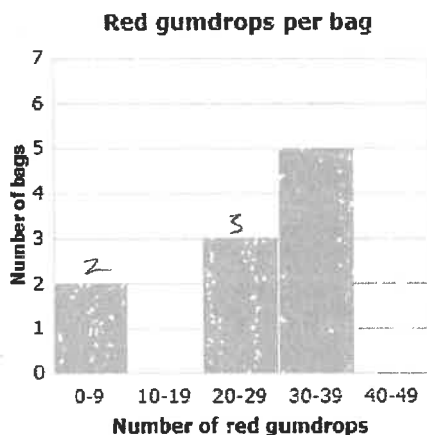
b. How would you describe a typical age of an actress who won the award?

Ages 24 through 31

c. An age of 72 would be included in which interval?

72-80

2) A machine dispensed red gumdrops into bags of various sizes.



Are there fewer bags that had 0-9 red gumdrops or bags that had 40-49 red gumdrops?

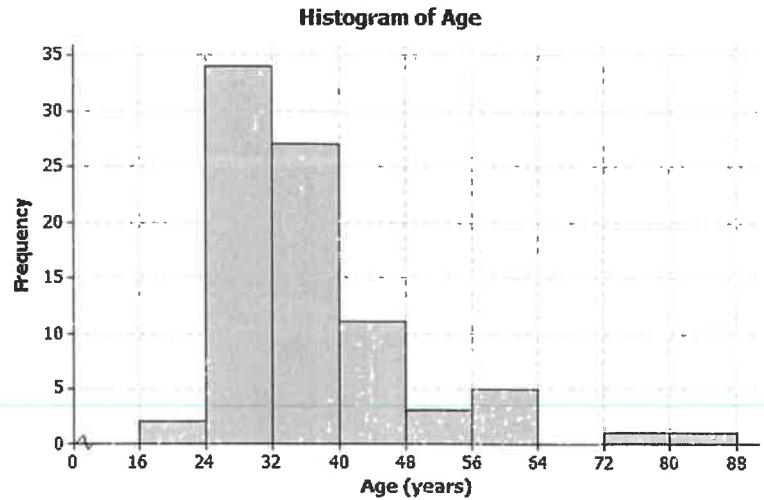
There are fewer bags in 40-49 because there isn't a bar located in the histogram graph.

Name: \_\_\_\_\_

Number: \_\_\_\_\_

### Lesson 6.4 - Exit Ticket

1) The following histogram shows ages of the actresses whose performances have won in the Best Leading Actress category at the annual Academy Awards (Oscars).



a. Which age interval contains the most actresses? How many actresses are represented in that interval?

The actress with a range of ages that are from 24-32. there are 34 actress represented.

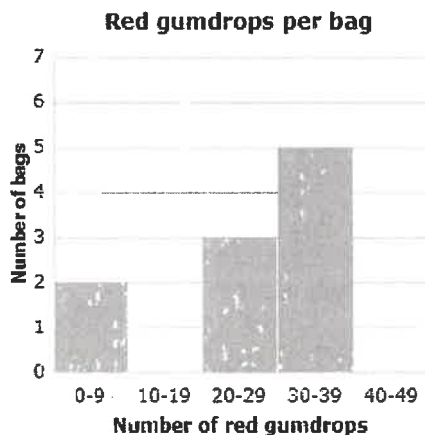
b. How would you describe a typical age of an actress who won the award?

The typical age would be in a range between 24-32.

c. An age of 72 would be included in which interval?

The interval of 72-80.

2) A machine dispensed red gumdrops into bags of various sizes.



Are there fewer bags that had 0-9 red gumdrops or bags that had 40-49 red gumdrops?

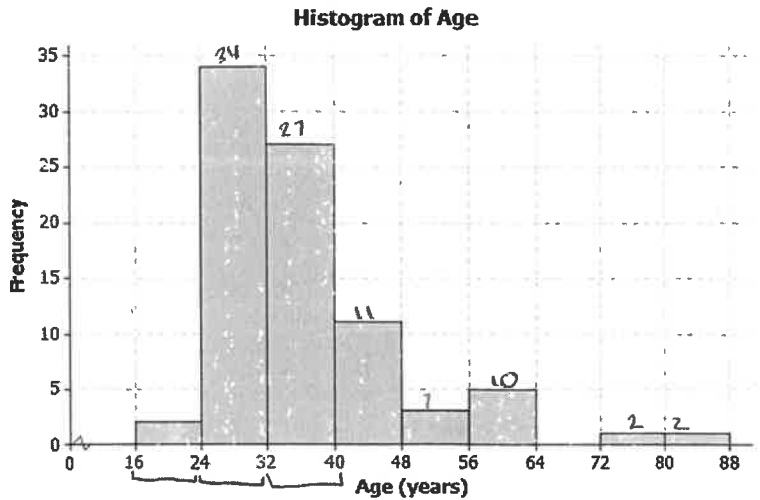
There are fewer bags that had a range of 40-49 red gumdrops.

Name: Maryama

Number: \_\_\_\_\_

### Lesson 6.4 - Exit Ticket

1) The following histogram shows ages of the actresses whose performances have won in the Best Leading Actress category at the annual Academy Awards (Oscars).



a. Which age interval contains the most actresses? How many actresses are represented in that interval?

The age range that contains the most actresses is between 24-30 years old.

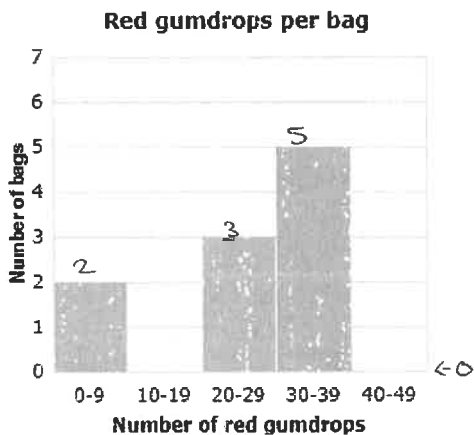
b. How would you describe a typical age of an actress who won the award?

The typical age of an actress who has won an award is between 24-31 years old.

c. An age of 72 would be included in which interval?

The age 72 will be included in the interval between the age range of 72-80 years old.

2) A machine dispensed red gumdrops into bags of various sizes.



Are there fewer bags that had 0-9 red gumdrops or bags that had 40-49 red gumdrops?

There are more bags with 0-9 gumdrops than bags with 40-49 red gumdrops.

Name: Tiffany

Number: \_\_\_\_\_

### Lesson 6.4 - Exit Ticket

1) The following histogram shows ages of the actresses whose performances have won in the Best Leading Actress category at the annual Academy Awards (Oscars).



a. Which age interval contains the most actresses? How many actresses are represented in that interval?

24-32 interval contains the most actresses.

There are about 34 actresses are represented in the interval 24-32.

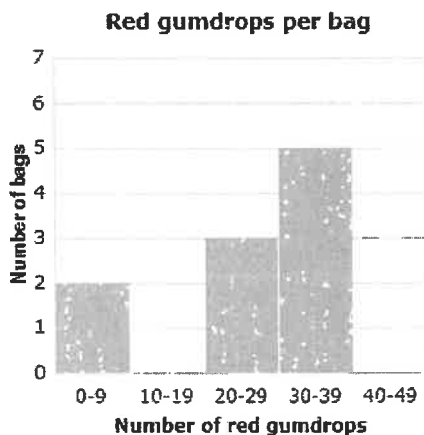
b. How would you describe a typical age of an actress who won the award?

Somebody that age above 24 but less than 32 would typically win the award.

c. An age of 72 would be included in which interval?

The interval 72-80 would be included in age 72.

2) A machine dispensed red gumdrops into bags of various sizes.



Are there fewer bags that had 0-9 red gumdrops or bags that had 40-49 red gumdrops?

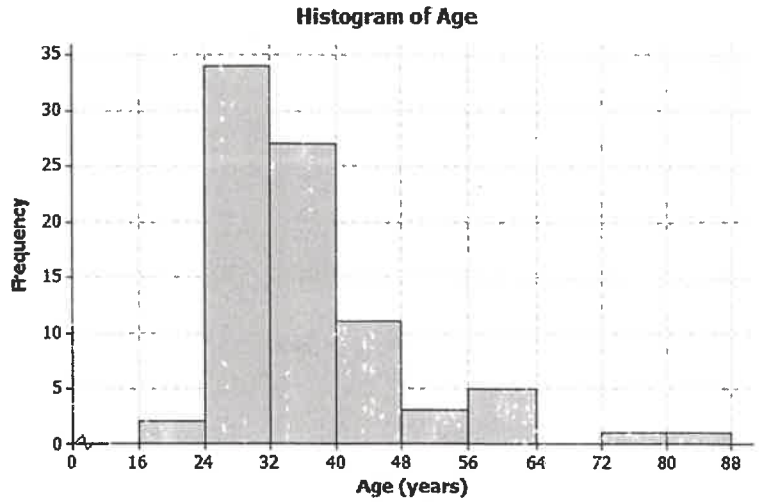
There are more bags in the intervals 0-9 than 40-49 red gumdrops.

Name: Saran

Number: \_\_\_\_\_

### Lesson 6.4 - Exit Ticket

1) The following histogram shows ages of the actresses whose performances have won in the Best Leading Actress category at the annual Academy Awards (Oscars).



a. Which age interval contains the most actresses? How many actresses are represented in that interval?

At interval 24-31 the most actresses  
- About 35 actresses are in that interval

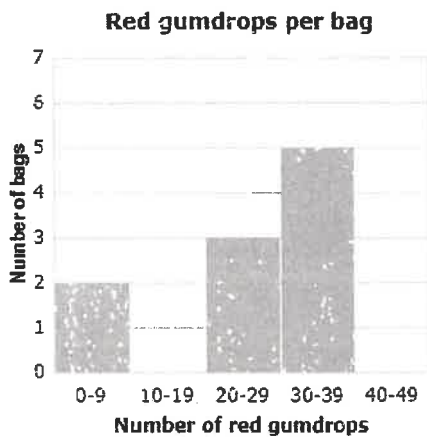
b. How would you describe a typical age of an actress who won the award?

I would say the age of 24-31 b/c it has the most frequency

c. An age of 72 would be included in which interval?

72-80

2) A machine dispensed red gumdrops into bags of various sizes.



Are there fewer bags that had 0-9 red gumdrops or bags that had 40-49 red gumdrops?

Fewer bags that had 40-49 red gumdrops

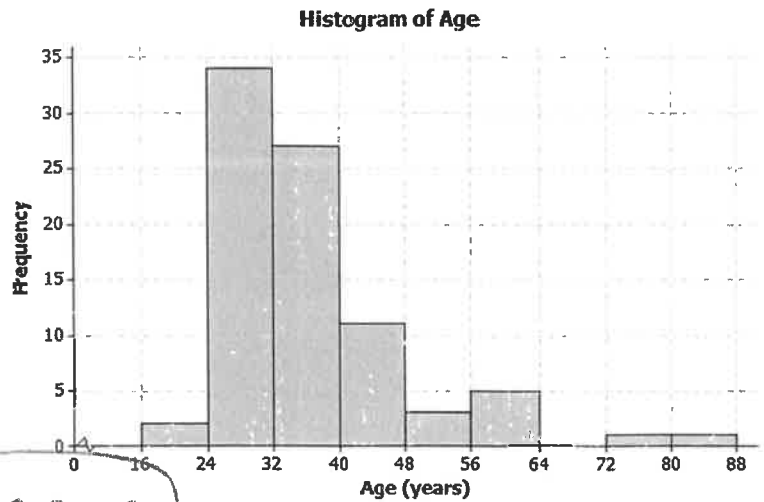


Name: Mike

Number: \_\_\_\_\_

### Lesson 6.4 - Exit Ticket

1) The following histogram shows ages of the actresses whose performances have won in the Best Leading Actress category at the annual Academy Awards (Oscars).



a. Which age interval contains the most actresses? How many actresses are represented in that interval?

$$\begin{array}{r} 24 \\ -24 \\ \hline 08 \end{array}$$

24-32

8 actresses

24 → 25 → 26 → 27 → 28 → 29 → 30 → 31 → 32

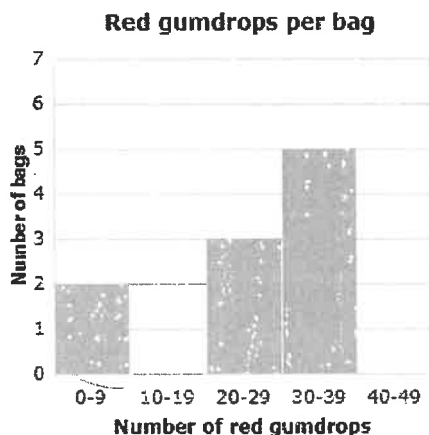
b. How would you describe a typical age of an actress who won the award?

The typical age of an actress would be 24-32 or 32-40 years old.

c. An age of 72 would be included in which interval?

72-80

2) A machine dispensed red gumdrops into bags of various sizes.



Are there fewer bags that had 0-9 red gumdrops or bags that had 40-49 red gumdrops?

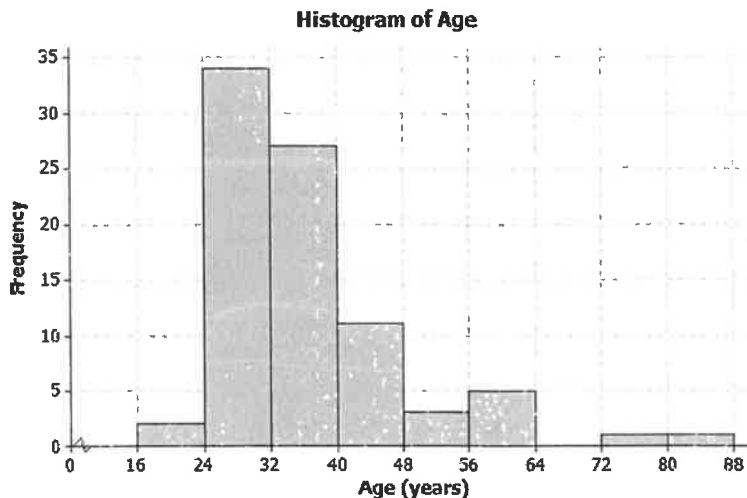
There isn't a bar for 40-49 so I think there would be fewer bags for that.

Name: Liam

Number:     

### Lesson 6.4 - Exit Ticket

1) The following histogram shows ages of the actresses whose performances have won in the Best Leading Actress category at the annual Academy Awards (Oscars).



a. Which age interval contains the most actresses? How many actresses are represented in that interval?

24-32 contains the most actresses, and 34 actresses are represented in that interval.

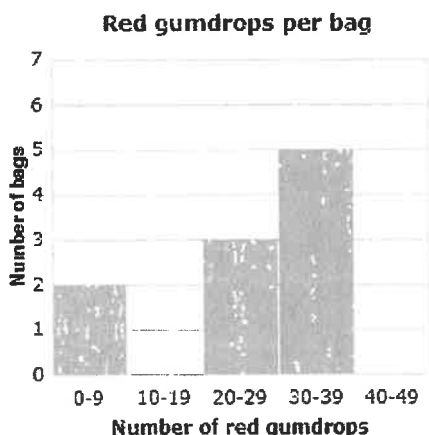
b. How would you describe a typical age of an actress who won the award?

The typical age of an actress who won the award is 24-32, so 24, 25, 26, 27, 28, 29, 30, and 31 are the typical ages of actresses who won the award.

c. An age of 72 would be included in which interval?

The age 72 will be included in 72-80.

2) A machine dispensed red gumdrops into bags of various sizes.



Are there fewer bags that had 0-9 red gumdrops or bags that had 40-49 red gumdrops?

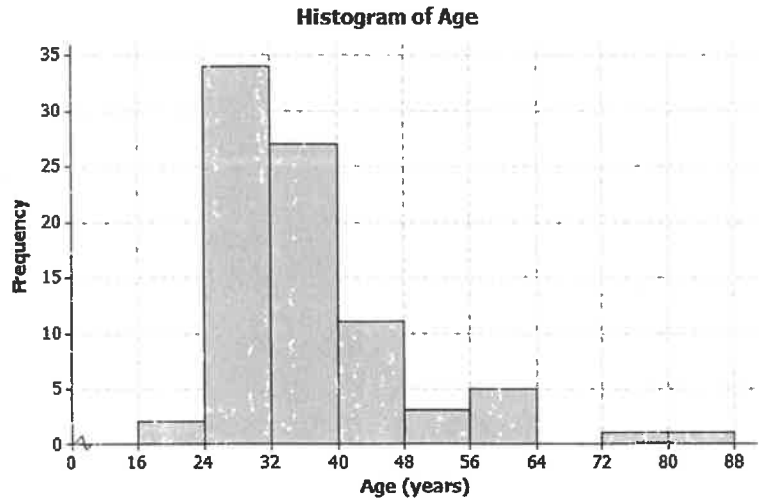
There is fewer bags that had 40-49 red gumdrops than bags that had 0-9 red gumdrops.

Name: Francis

Number: \_\_\_\_\_

### Lesson 6.4 - Exit Ticket

1) The following histogram shows ages of the actresses whose performances have won in the Best Leading Actress category at the annual Academy Awards (Oscars).



a. Which age interval contains the most actresses? How many actresses are represented in that interval?

Age 24-32 and the amount of actresses represented in that interval is 34.

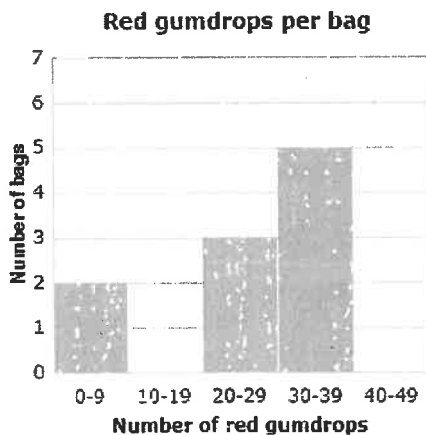
b. How would you describe a typical age of an actress who won the award?

She would have to be around 24-32 years old.

c. An age of 72 would be included in which interval?

It will be included in 72-86.

2) A machine dispensed red gumdrops into bags of various sizes.



Are there fewer bags that had 0-9 red gumdrops or bags that had 40-49 red gumdrops?

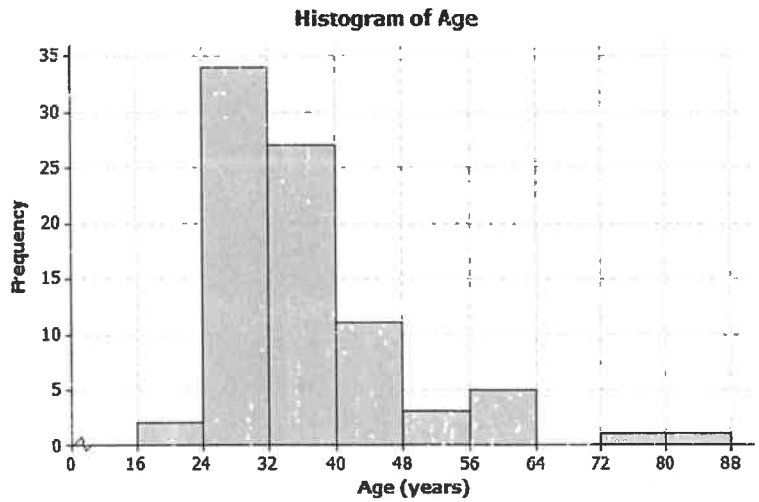
No, because 2 bags have 0-9 gumdrops while 0 bags have 40-49 gumdrops. That means that there are more bags with 0-9 gumdrops than the 0 bags that have 40-49 gumdrops.

Name: James

Number: \_\_\_\_\_

### Lesson 6.4 - Exit Ticket

1) The following histogram shows ages of the actresses whose performances have won in the Best Leading Actress category at the annual Academy Awards (Oscars).



a. Which age interval contains the most actresses? How many actresses are represented in that interval?

It's 24-32 because it's most common.

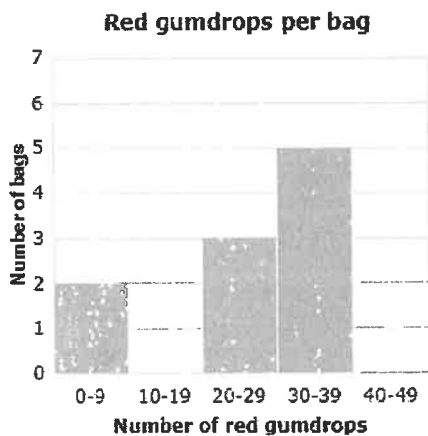
b. How would you describe a typical age of an actress who won the award?

A typical age would be 36.

c. An age of 72 would be included in which interval?

72-80

2) A machine dispensed red gumdrops into bags of various sizes.



Are there fewer bags that had 0-9 red gumdrops or bags that had 40-49 red gumdrops?

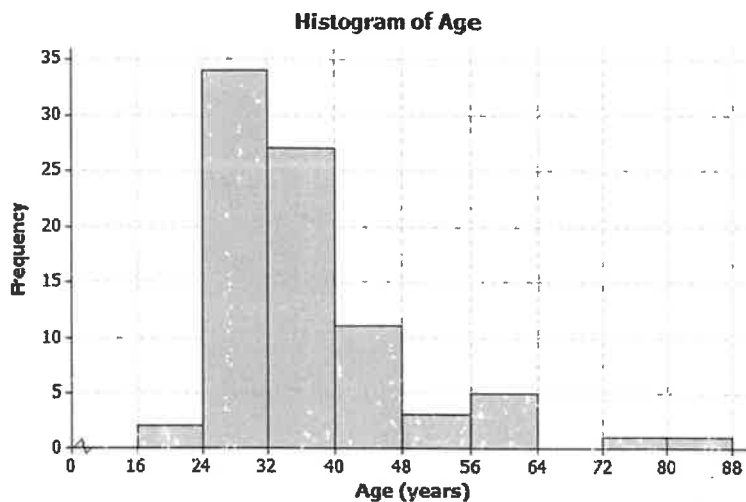
there are fewer bag with 40-49 gumdrops than bags that have 0-9 red gumdrops.

Name: Aiden

Number: \_\_\_\_\_

### Lesson 6.4 - Exit Ticket

1) The following histogram shows ages of the actresses whose performances have won in the Best Leading Actress category at the annual Academy Awards (Oscars).



a. Which age interval contains the most actresses? How many actresses are represented in that interval?

24-32 actresses

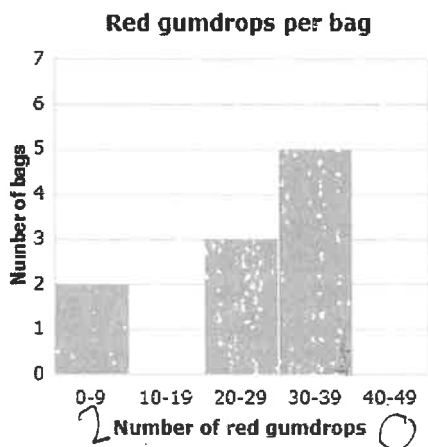
b. How would you describe a typical age of an actress who won the award?

24-31 actresses

c. An age of 72 would be included in which interval?

70-79 / 70-80

2) A machine dispensed red gumdrops into bags of various sizes.



Are there fewer bags that had 0-9 red gumdrops or bags that had 40-49 red gumdrops?

fewer bags  
21 bags because 40-49 red gum drops have a zero

Name: Sose

Number: \_\_\_\_\_

### Lesson 6.4 - Exit Ticket

1) The following histogram shows ages of the actresses whose performances have won in the Best Leading Actress category at the annual Academy Awards (Oscars).



a. Which age interval contains the most actresses? How many actresses are represented in that interval?

24 - 32      34 actresses

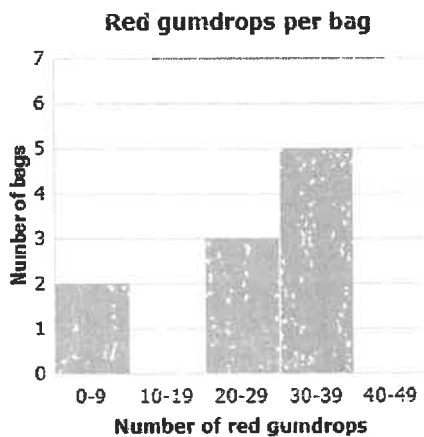
b. How would you describe a typical age of an actress who won the award?

24 - 32 years old

c. An age of 72 would be included in which interval?

72 - 80

2) A machine dispensed red gumdrops into bags of various sizes.



Are there fewer bags that had 0-9 red gumdrops or bags that had 40-49 red gumdrops?

There are fewer bags that have 40-49 gumdrops because there are no bags with 40-49 gumdrops.

Name: Janelle

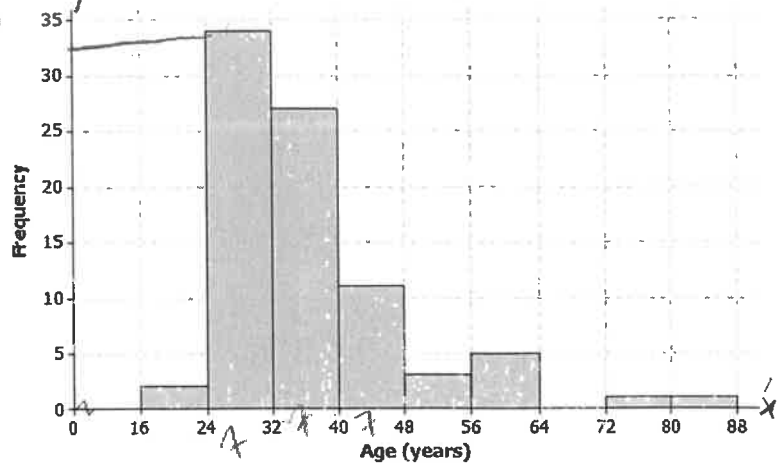
Number: \_\_\_\_\_

### Lesson 6.4 - Exit Ticket

1) The following histogram shows ages of the actresses whose performances have won in the Best Leading Actress category at the annual Academy Awards (Oscars).

*the x-axis axis*

Histogram of Age



a. Which age interval contains the most actresses? How many actresses are represented in that interval?

*24-32 | 24-31*

b. How would you describe a typical age of an actress who won the award?

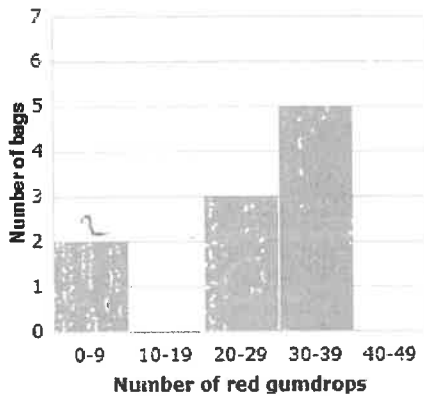
*around the age of 30-25*

c. An age of 72 would be included in which interval?

*72-80*

2) A machine dispensed red gumdrops into bags of various sizes.

Red gumdrops per bag



*Yes there are fewer bags than had 0-9 gumdrops*

Are there fewer bags that had 0-9 red gumdrops or bags that had 40-49 red gumdrops?

*2 bags - 0-9*

*0 bags - 40-49*

Name: Zay

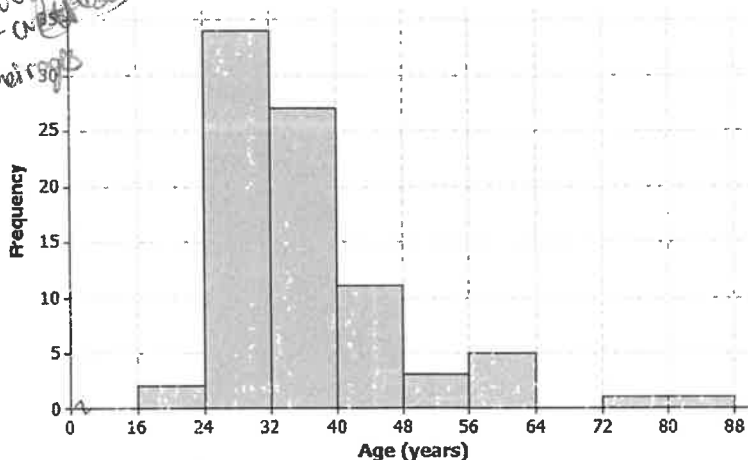
Number: \_\_\_\_\_

### Lesson 6.4 - Exit Ticket

1) The following histogram shows ages of the actresses whose performances have won in the Best Leading Actress category at the annual Academy Awards (Oscars).

*Handwritten note:* histogram of actresses' ages

Histogram of Age



a. Which age interval contains the most actresses? How many actresses are represented in that interval?

*Handwritten answer:* the interval of 24-32 has the most actresses. there are 30 actresses.

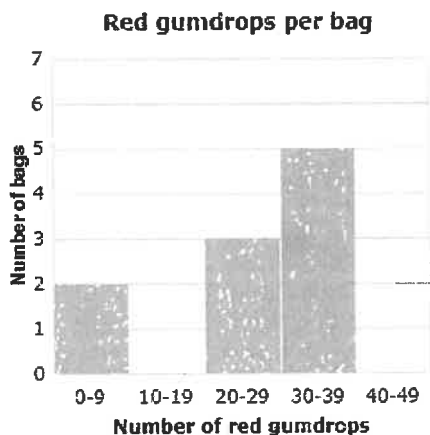
b. How would you describe a typical age of an actress who won the award?

*Handwritten answer:* I would say the typical age is 24 years old - 32 year old. (24, 25, 26, 27, 28, 29, 30, 31)

c. An age of 72 would be included in which interval?

*Handwritten answer:* 72-80 would have the number 72

2) A machine dispensed red gumdrops into bags of various sizes.



Are there fewer bags that had 0-9 red gumdrops or bags that had 40-49 red gumdrops?

*Handwritten answer:* there are fewer bags that had 40-49 red gumdrops b/c there were no bags for 40-49, but there are 2 bags for 0-9.

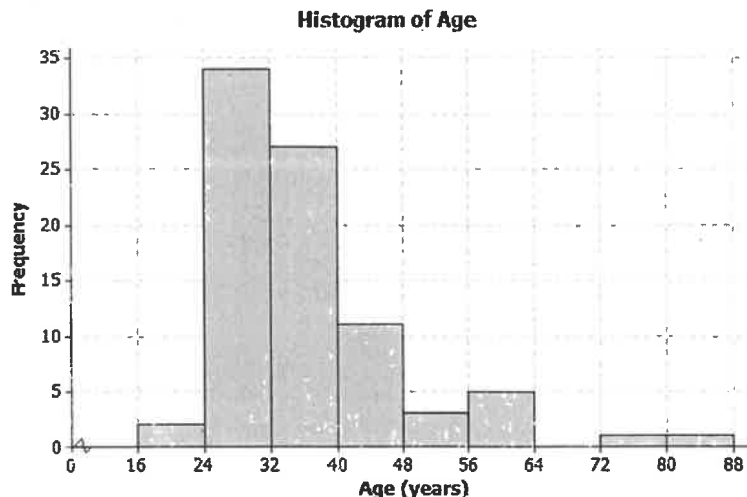


Name: Jay W

Number: \_\_\_\_\_

### Lesson 6.4 - Exit Ticket

1) The following histogram shows ages of the actresses whose performances have won in the Best Leading Actress category at the annual Academy Awards (Oscars).



a. Which age interval contains the most actresses? How many actresses are represented in that interval?

ages 24-32 there are the most with 34 actresses

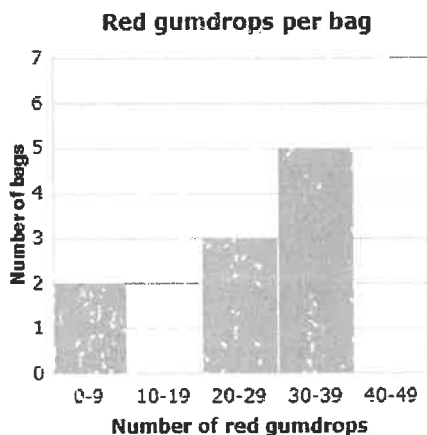
b. How would you describe a typical age of an actress who won the award?

the typical age was 24-32

c. An age of 72 would be included in which interval?

72-80 ages would be included

2) A machine dispensed red gumdrops into bags of various sizes.



Are there fewer bags that had 0-9 red gumdrops or bags that had 40-49 red gumdrops?

No because the bag amount is 2 for 0-9 while it is 0 for 40-49

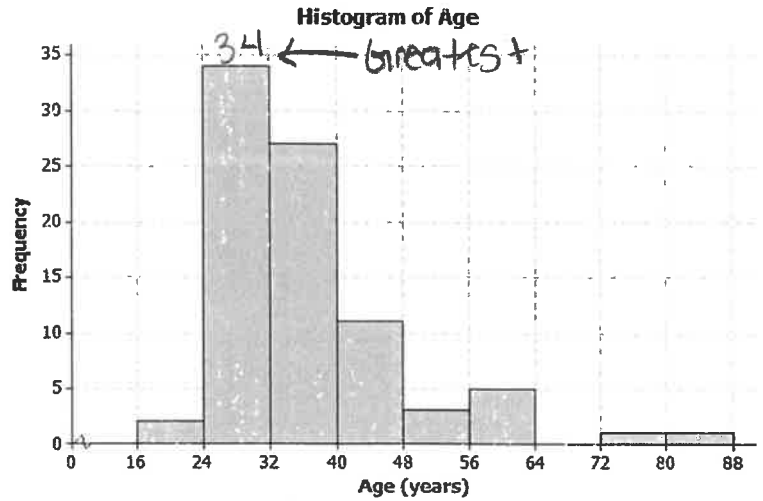
Name: Emily E.

4/4/19

Number: \_\_\_\_\_

### Lesson 6.4 - Exit Ticket

1) The following histogram shows ages of the actresses whose performances have won in the Best Leading Actress category at the annual Academy Awards (Oscars).



a. Which age interval contains the most actresses? How many actresses are represented in that interval?

The age interval, 24-32, has 34 actresses represented

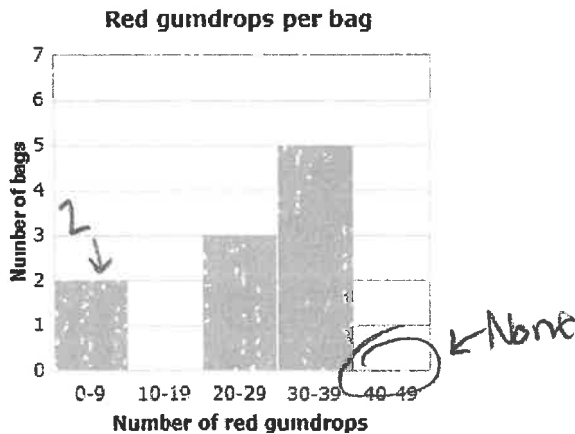
b. How would you describe a typical age of an actress who won the award?

I would describe a typical age as between 24 and 40

c. An age of 72 would be included in which interval?

72 would be included in 72-80.

2) A machine dispensed red gumdrops into bags of various sizes.



Are there fewer bags that had 0-9 red gumdrops or bags that had 40-49 red gumdrops?

0-9 → 2 > 0 ← 40-49

There were fewer bags that had 40-49 red gumdrops.

Name: Emma

Number: \_\_\_\_\_

### Lesson 6.4 - Exit Ticket

1) The following histogram shows ages of the actresses whose performances have won in the Best Leading Actress category at the annual Academy Awards (Oscars).



a. Which age interval contains the most actresses? How many actresses are represented in that interval?

Interval: 24-32

34 actresses on that interval

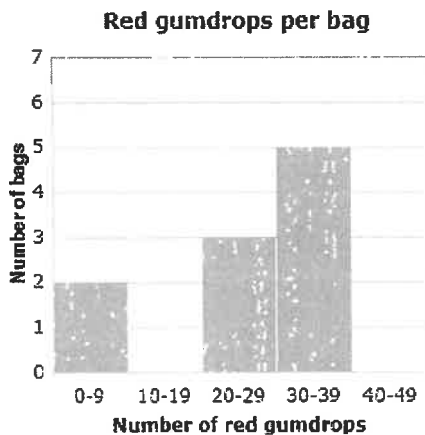
b. How would you describe a typical age of an actress who won the award?

24-32 years of age

c. An age of 72 would be included in which interval?

72-80

2) A machine dispensed red gumdrops into bags of various sizes.



Are there fewer bags that had 0-9 red gumdrops or bags that had 40-49 red gumdrops?

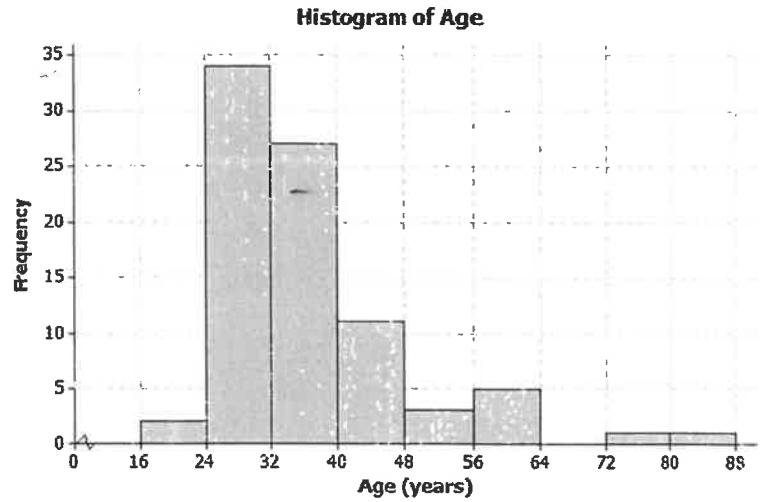
40-49 is lower because the bar on 0-9 is higher than 40-49, so that shows that the 0-9 red gumdrops has more bags than the 40-49 gumdrops, and that shows that 40-49 is lower, as the bar is lower.

Name: Sanaal

Number: \_\_\_\_\_

### Lesson 6.4 - Exit Ticket

1) The following histogram shows ages of the actresses whose performances have won in the Best Leading Actress category at the annual Academy Awards (Oscars).



a. Which age interval contains the most actresses? How many actresses are represented in that interval?

24 contains the most  
34 are represented.

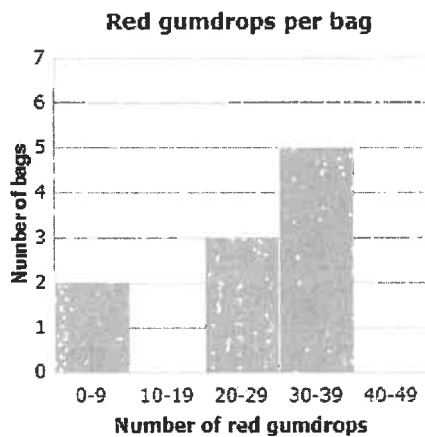
b. How would you describe a typical age of an actress who won the award?

I would describe 24-32 as a typical age.

c. An age of 72 would be included in which interval?

72-80

2) A machine dispensed red gumdrops into bags of various sizes.



Are there fewer bags that had 0-9 red gumdrops or bags that had 40-49 red gumdrops?

There are fewer bags that had 40-49 red gumdrops.